

Paper Reference 4MA1/2F  
Pearson Edexcel  
International GCSE

Mathematics A  
PAPER 2F  
Foundation Tier  
(Calculator)

Diagram Book

In the boxes below, write your name, centre number and candidate number.

Surname					
Other names					
Centre Number					
Candidate Number					

## INSTRUCTIONS

There may be spare copies of some diagrams in case you need them.

**THIS DIAGRAM BOOK MUST BE RETURNED WITH THE  
QUESTION PAPER AT THE END OF THE EXAMINATION.**

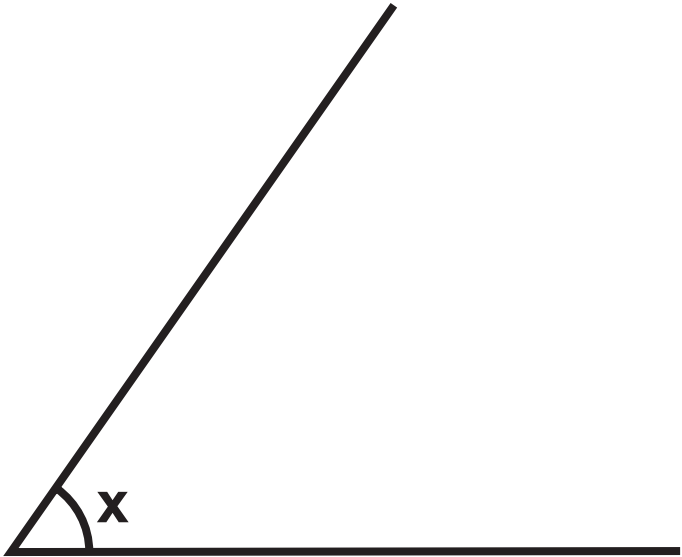
**Contents****Page**

<b>4</b>	<b>Question 1</b>
<b>5</b>	<b>Question 2(b)</b>
<b>6</b>	<b>Question 2(c)</b>
<b>7</b>	<b>Question 3</b>
<b>8</b>	<b>Question 4</b>
<b>9</b>	<b>Question 4 (Spare copy)</b>
<b>10</b>	<b>Question 5(a)</b>
<b>11</b>	<b>Question 5(a) (Spare copy)</b>
<b>12</b>	<b>Question 7</b>
<b>13</b>	<b>Question 9</b>
<b>14</b>	<b>Question 10</b>
<b>15</b>	<b>Question 10 (Spare copy)</b>
<b>16</b>	<b>Question 12</b>
<b>17</b>	<b>Question 19 (NOT accurately drawn)</b>
<b>18</b>	<b>Question 21 (NOT accurately drawn)</b>
<b>19</b>	<b>Question 24 (NOT accurately drawn)</b>

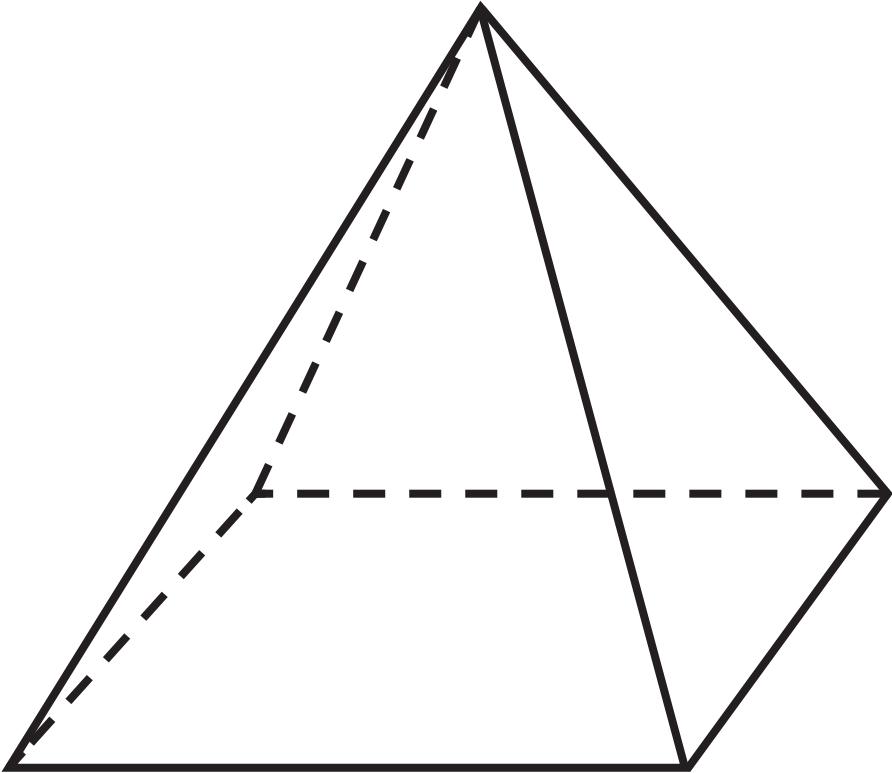
Question 1

Ocean	Length (kilometres)
Arctic	45 389
Atlantic	111 866
Indian	66 526
Pacific	135 663
Southern	17 968

Question 2(b)



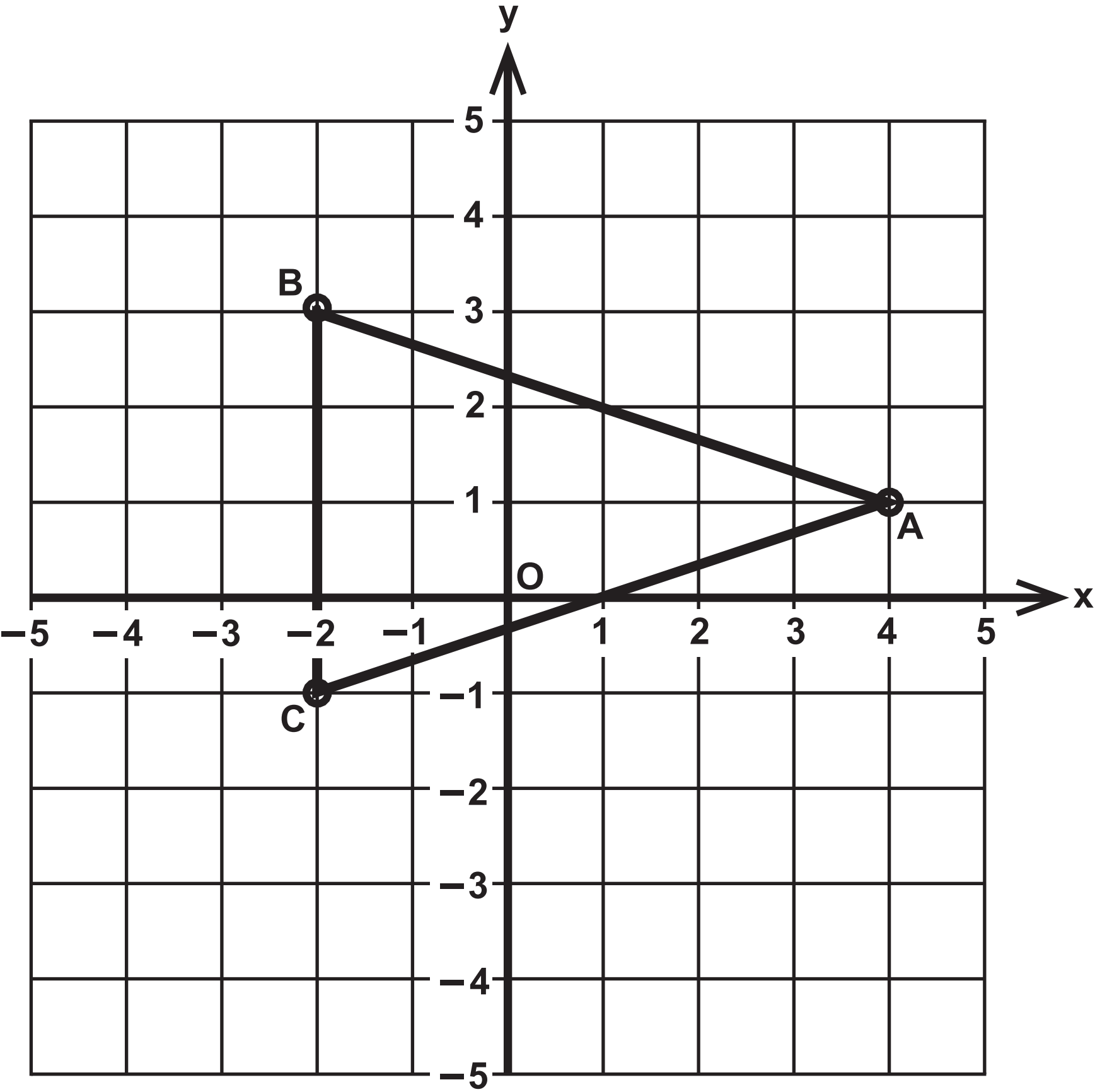
Question 2(c)



Question 3

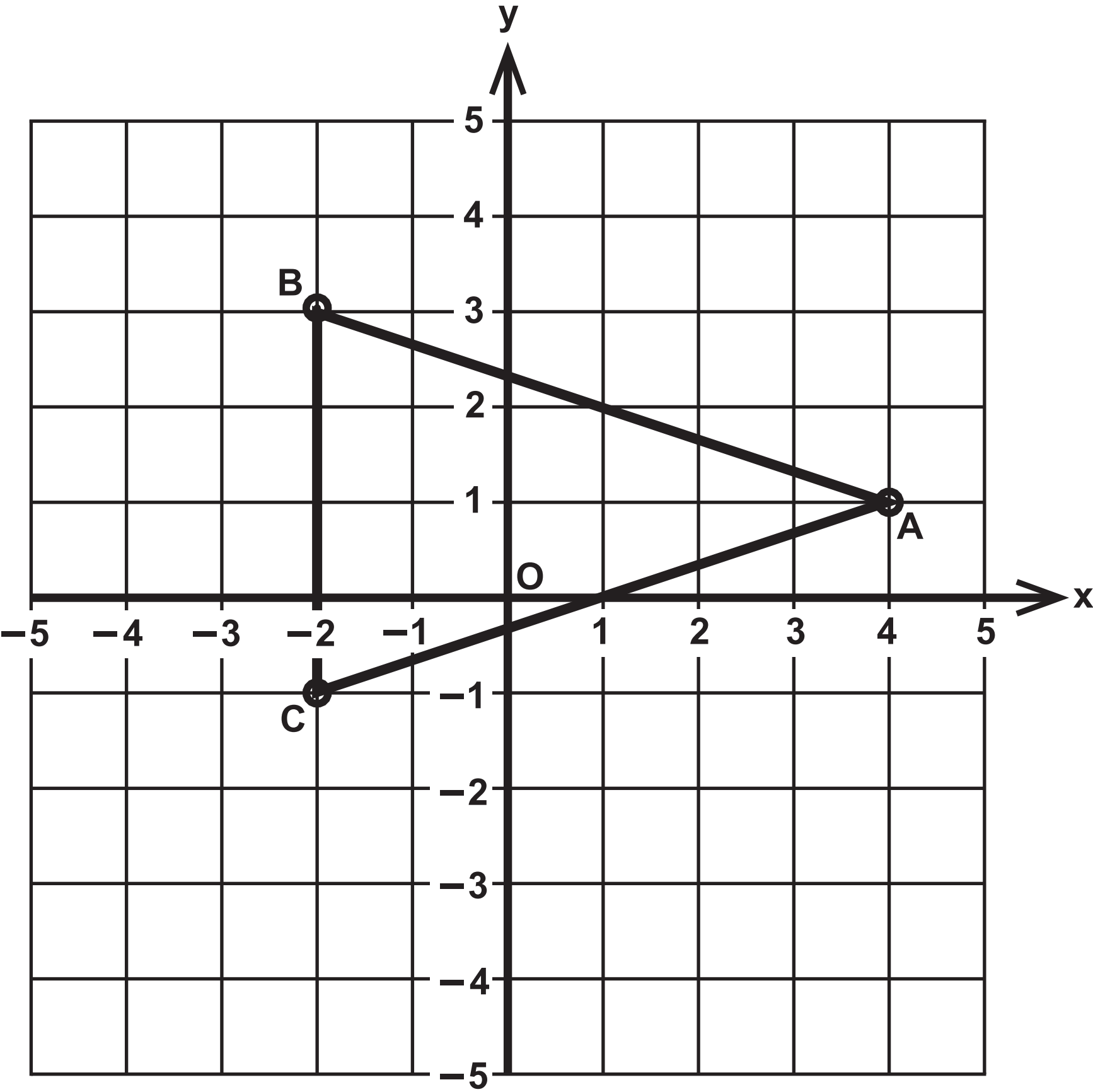
Monday	<div><div><div></div><div></div><div></div><div></div></div><div><div></div><div></div><div></div><div></div></div><div><div></div><div></div></div></div>
Tuesday	<div><div><div></div><div></div><div></div><div></div></div><div><div></div><div></div><div></div><div></div></div><div><div></div><div></div><div></div><div></div></div><div><div></div><div></div><div></div><div></div></div></div>
Wednesday	<div><div><div></div><div></div><div></div><div></div></div><div><div></div><div></div></div></div>
Thursday	<div><div><div></div><div></div><div></div></div></div>
Friday	<div><div><div></div><div></div><div></div><div></div></div><div><div></div><div></div><div></div><div></div></div><div><div></div><div></div><div></div><div></div></div><div><div></div></div></div>

Question 4





Question 4



Question 5(a)


Question 5(a)


Question 7

<b>Starter</b>	<b>Main course</b>
<b>Fruit (F)</b> <b>Prawns (P)</b> <b>Soup (S)</b>	<b>Burger (B)</b> <b>Curry (C)</b> <b>Lasagne (L)</b> <b>Risotto (R)</b>

Question 9

Number of pieces of homework	Frequency
3	4
4	8
5	10
6	12
7	4

## Question 10



## Question 10



**Question 12**

**Question 12(a)**

$$\text{Cost} = 65 \times \text{number of days} + 44$$

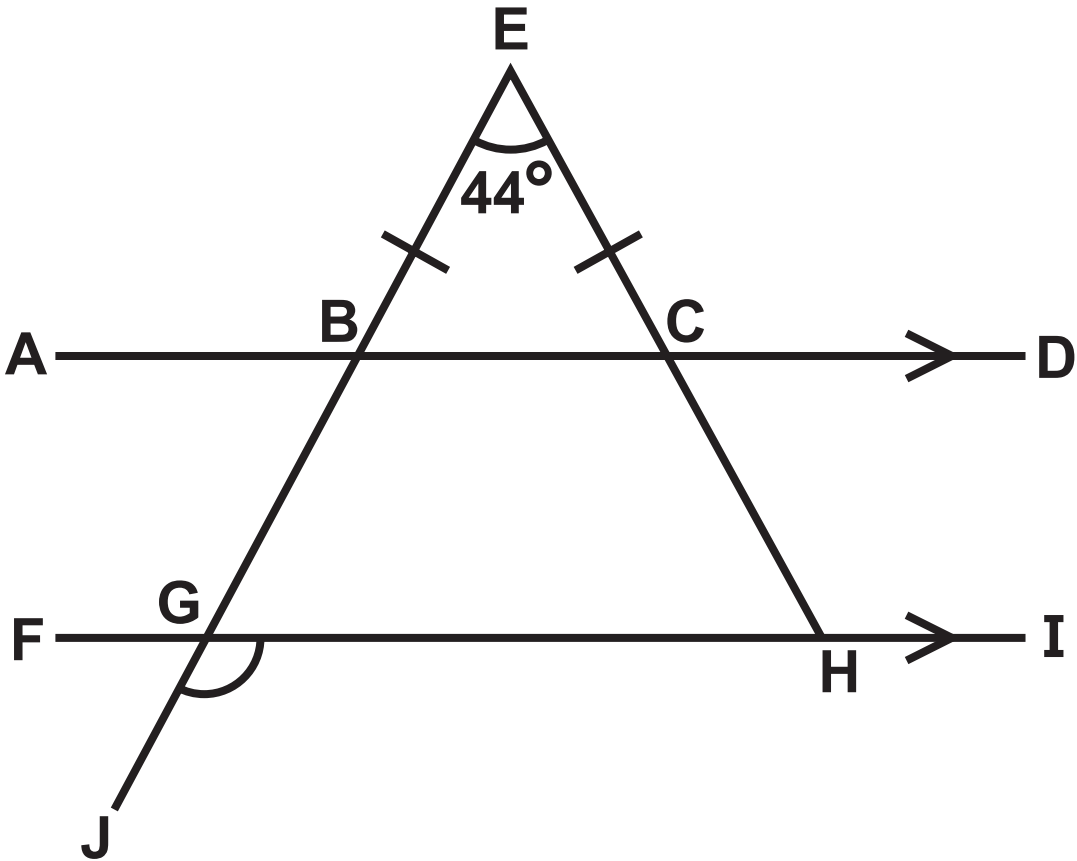
**Question 12(b)**

$$\text{Cost} = 12.5 \times \text{number of days}$$



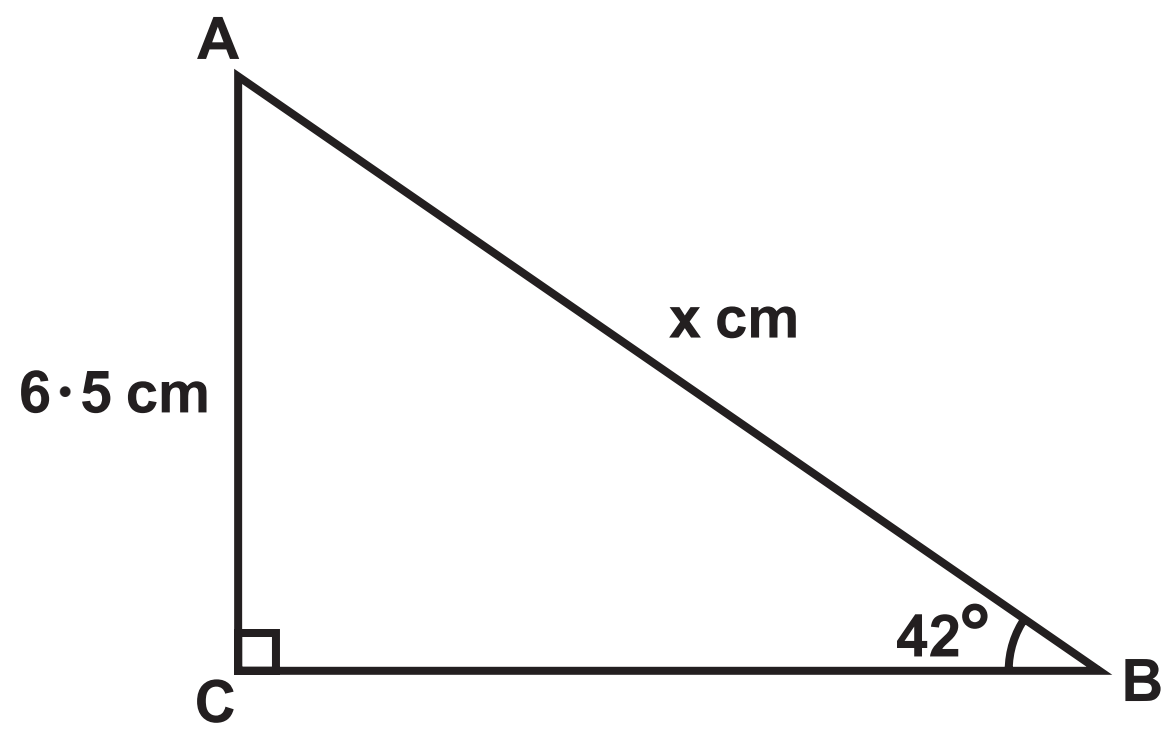
Question 19

Diagram NOT  
accurately drawn



## Question 21

Diagram NOT  
accurately drawn



Question 24

Diagram 1

Diagram NOT  
accurately drawn

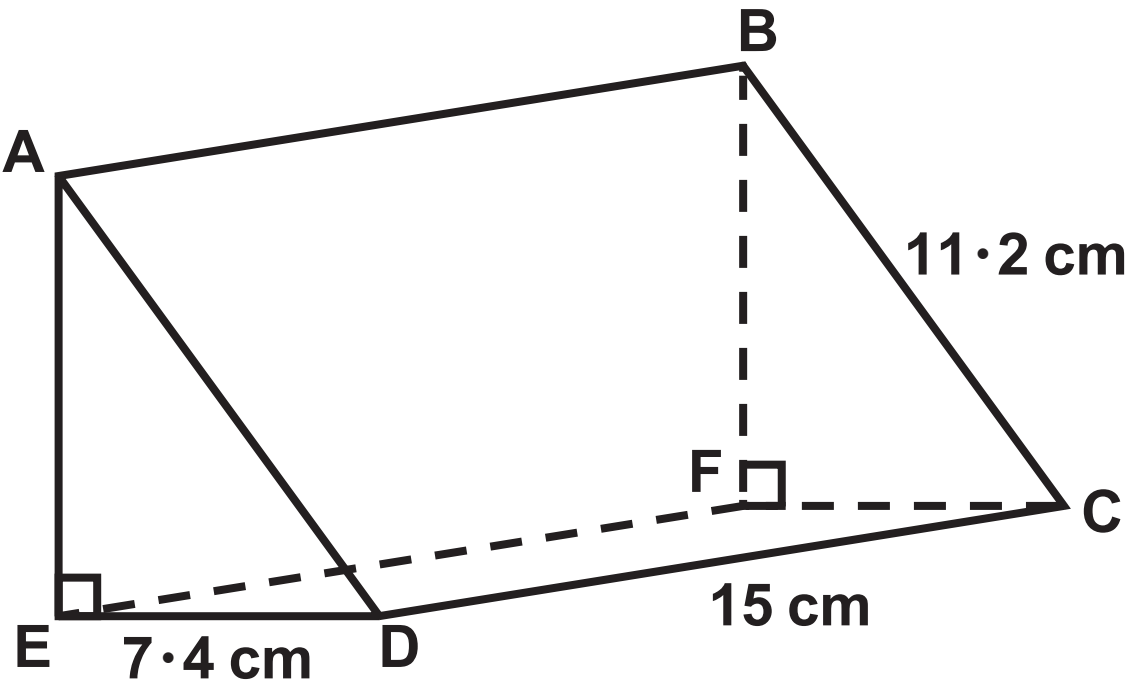


Diagram 2

Diagram NOT  
accurately drawn

